


Gr. 1-2 Special Needs Summer Bridge

Unit One

# Things We Wear During Summer



Trace the words



hat

---



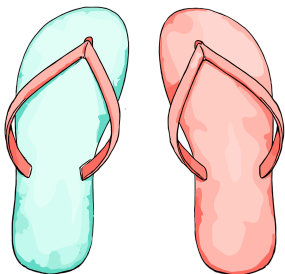
shorts

---




glasses

---



flip-flops

Copy the words



hat

---

---

---



shorts

---

---

---

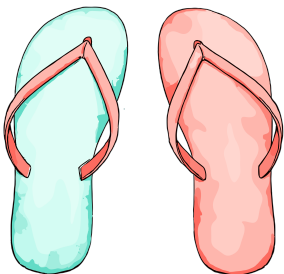


glasses

---

---

---




flip-flops

---

---

---

Say each word. Cut out the words.  
Match and paste them on the next page.



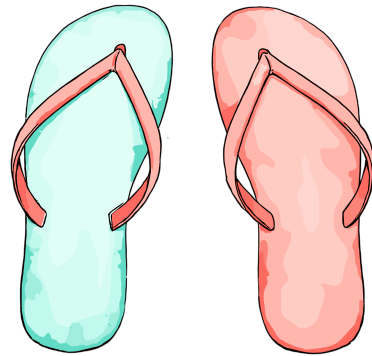
hat



shorts




glasses



flip-flops

Glue each word from the previous page  
over its matching word.



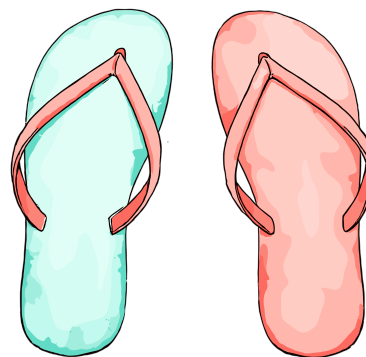
hat



shorts



glasses




flip-flops

Match the words

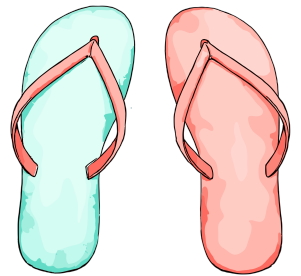
flip-flops ●

● hat



glasses ●

● flip-flops



shorts ●

● glasses



hat ●

● shorts




Match each word to its picture


flip-flops ●



glasses ●




shorts ●



hat ●



Tap and say the sound in each box. Then copy each word.



h	a	t
---	---	---

h	a	t
---	---	---



sh	or	t	s
----	----	---	---


--	--	--	--



g	l	a	ss	e	s
---	---	---	----	---	---

--	--	--	--	--

Read the passage.



## Summer Time

In the summer, it is hot.

So I wear shorts.

In the summer, it is sunny.

So I wear glasses and a hat.

In the summer I also wear  
flip-flops.

Do you wear a hat in the  
summer ?

Do you wear shorts ?

Do you wear flip - flops ?

Do you wear glasses ?

Summer is a time for hats  
and flip-flops.


What do you like to wear in summer?

Write a sentence about it.

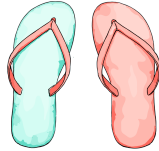
Words to use:



shorts



hat



flip-flops



glasses



dress

wear

summer

like

t-shirt

sandals

---

---

---

---

---


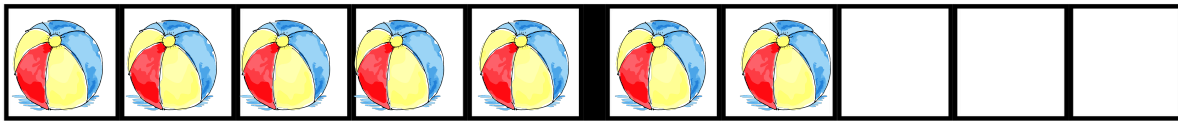

---

---

---

---

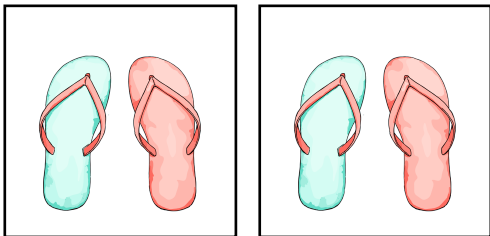


Write how many. Circle the group that has more.



Count by 2s. Write how many.

2 4 6 8 10

12 14 16 18 20



Write how many and add.



$$\boxed{2} + \boxed{3} = \boxed{\phantom{00}}$$

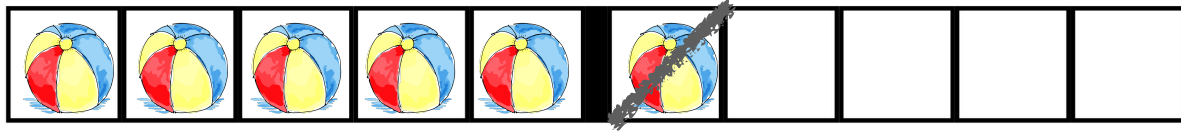


$$\boxed{\phantom{00}} + \boxed{\phantom{00}} = \boxed{\phantom{00}}$$



$$\boxed{\phantom{00}} + \boxed{\phantom{00}} = \boxed{\phantom{00}}$$

# Cross out to Subtract



$$6 - 1 = \square$$



$$5 - 2 = \square$$




$$8 - 3 = \square$$

Read and solve.

Jen had three hats.

She lost one at the beach.

How many hats does she have left?



$$\boxed{3} - \boxed{1} = \boxed{\phantom{0}}$$

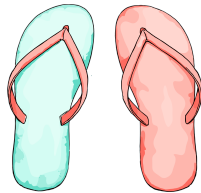
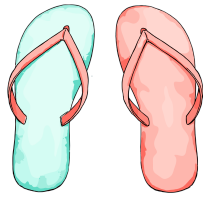
Jen has \_\_\_\_\_ hats left.

Read and solve.

Sam had two flip-flops.

He found two more at the beach.




How many flip-flops does he have now?



$$\square + \square = \square$$

Sam has \_\_\_\_\_ flip-flops.

Cut on the dotted line.



## Enjoyed these worksheets?

Units 2 (Summer Food and Drink)  
and 3 (At the Beach)  
are available at [tpt.com](https://www.tpt.com)

[https://www.teacherspayteachers.com/Product/  
First-Grade-Summer-Packet-for-Special-  
Education-16375843](https://www.teacherspayteachers.com/Product/First-Grade-Summer-Packet-for-Special-Education-16375843)

visit [MercyforMarthas.com](https://www.mercyformarthas.com) for more educational resources

### **Credits:**

Fonts by KG Fonts

Clip Art by Katherine Chase